



**ADARSH VIDYA NIKETAN**  
**SENIOR SECONDARY SCHOOL**  
**SECTOR -19, FARIDABAD**

**HOLIDAY**  
**HOMEWORK**

**CLASS- V**

**SESSION**

**2024-25**

**SUMMER**





## ENGLISH

### **WORKSHEET-1 (VOCABLUARY)**

(a) Sarah keeps a \_\_\_\_\_ where she writes about her daily experiences and thoughts.

(diary/dairy)

(b).The farmer milks the cows every morning at the \_\_\_\_\_.(diary/dairy)

©The medicine had a positive \_\_\_\_\_ on her health.(affect/effect)

(d).Heavy rain may \_\_\_\_\_the outdoor event.(affect/effect)

(e).The Smiths forgot \_\_\_\_\_ picnic basket at home, so they couldn't enjoy lunch (there/their)

(f) Lets meet \_\_\_\_\_ near the big oak tree in the middle of the par (their/there)

(g)Learning a new language is easier \_\_\_\_\_ it seems. (than/then)

(h) First, we'll have dinner, and \_\_\_\_\_ we'll go for a walk.(than/then)

Q2) Write the meaning of the following Idioms

(a) Break the ice



(b) Cost an arm and a leg







© Hit the nail on the head

*'To hit the nail on the head'*



(d) Piece of cake



(e) CLOUD NINE



Q3) Rewrite each sentence by replacing the underlined word with a synonym.

1. The cat was furious when the dog stole its food.
2. She felt joyful when she received the gift from her friend.
3. The courageous knight saved the kingdom from the dragon.
4. He's always been intelligent, excelling in math and science.
5. After the long hike, they were exhausted and ready to rest.
6. The beautiful sunset painted the sky with vibrant colours.
7. His humorous jokes always made everyone laugh at the party.



## WORKSHEET -2 GRAMMAR

Q4) Fill in the blanks with the correct form of the adjectives given in the brackets.

1. This is the \_\_\_\_\_ (beautiful) flower I have ever seen.
2. My brother is \_\_\_\_\_ (tall) than me.
3. It was the \_\_\_\_\_ (hot) day of the year.
4. She is the \_\_\_\_\_ (clever) student in our class.
5. That movie was \_\_\_\_\_ (boring) than I expected.
6. This book is \_\_\_\_\_ (interesting) than the last one.
7. He is the \_\_\_\_\_ (good) player of the team.
8. This cake tastes \_\_\_\_\_ (delicious) than the one we had yesterday.
9. This exercise is \_\_\_\_\_ (easy) than the previous one.
10. My dog is \_\_\_\_\_ (friendly) than yours.

Q5) Read each sentence carefully. Decide whether to use "a," "an," or "the" to complete each sentence. Write your answer in the blank space provided.

1. She wants to be \_\_\_\_\_ doctor when she grows up.
2. Can you pass me \_\_\_\_\_ salt, please?
3. There is \_\_\_\_\_ elephant in the zoo.
4. He bought \_\_\_\_\_ new car yesterday.
5. We visited \_\_\_\_\_ old castle in England.
6. \_\_\_\_\_ orange is a fruit.
7. I saw \_\_\_\_\_ interesting movie last night.
8. They went to \_\_\_\_\_ beach for a picnic.
9. I need \_\_\_\_\_ pencil to draw.
10. They live in \_\_\_\_\_ apartment building.

Q6) Rearrange the following group of words to form meaningful sentences.

- (a) Ramesh/the park/a boy/met/one day/in
- (b) was/old/young boy/seven years/the/only
- (c) asked/the nearest/he/bookstore/about/him
- (d) wanted/buy/he/to/books/a few





### WORKSHEET-3 (CREATIVE WRITING)

Q1. At some point, you must have had visitors salesmen, beggars, people asking for assistance, inquisitive neighbours, uninvited guests calling at your door. Do you remember any of these people in particular? Has one of them made an impression on you?

Write a short story titled The Visitor. Make your story as interesting as possible


Q 2 Write a paragraph on the topic My vision for India in the year 2050

Students can make use of the following ideas: ·

- Mention about your age and the kind of family in 2050 (Nuclear/Joint). ·
- Describe your city in 2050 (flying cars, air traffic, electronic devices, no use of plastic bags e-offices, space parks for children, sky scrapers, currency etc.).
- Describe a holiday on planet Mars.
- Draw Pictures to make your work creative.

कार्य प्रपत्र 1

संकेतों की सहायता से वर्ग-पहेली पूरी कीजिए।



संकेत

बाएँ से दाएँ →

1. सूरज का पर्यायवाची
3. यहाँ नमाज़ पढ़ने जाते हैं
5. एक फूल का नाम
7. एक सब्जी का नाम
9. नृत्य करने वाला

ऊपर से नीचे ↓

2. इसे सरदी में ओढ़ते हैं
4. किसान का पर्यायवाची
6. इससे कपड़े सिलते हैं
8. एक फल का नाम
10. एक पक्षी का नाम

प्रश्न -1 नीचे दिए गए शब्दों में 'र' का सही चिह्न लगाकर शब्द पुनः सामने लिखिए-

टेन	पराकम
वाषिक	धम
पण	पतिज्ञा
कण	पयोग
टक	डामा
आशीवाद	पतियोगिता
हष	पातः





प्रश्न- 2 नीचे दिए गए चित्रों को देखकर अनुस्वार ,अनुनासिक व विसर्ग लगाकर शब्द बनाएं।



कंप्यूटर



साप




दुखी



पखा



अगूठी



प्रात



घटा



चाद

प्रश्न- 3 निम्नलिखित शब्दों का वर्ण विच्छेद कीजिए-

प्रकृति, राष्ट्र, उपक्रम, आश्रय, पाक्षिक, व्यंजन, विज्ञान, प्रार्थी

प्रश्न 4 रिक्त स्थान भरिए:-

(क)संस्कृत भाषा के वे शब्द जो हिंदी भाषा में अपना रूप बदलकर प्रयुक्त किए जाते हैं, ---+----- कहलाते

(ख) सूर्य -----शब्द है।

(ग) जिन वाक्यों में प्रश्न पूछे जाते हैं, उन्हें----- वाक्य कहते हैं।

(घ) जिन वाक्यों में काम का न करना या न होना पाया जाए, उन्हें -----वाक्य कहते हैं।

प्रश्न 5 निम्नलिखित शब्दों में से तत्सम ,तद्भव , देशज और विदेशी शब्द छांट कर लिखिए:-

काग	चाय	घट	मस्तिष्क	घर	काक
आग	चश्मा	पगड़ी	गृह	हाथ	अश्रु
सौ	तृण	किताब	तोप	रोटी	चाकू
खेत	खाट	गोभी	खुरपा	खिड़की	बेटा

प्रश्न 6 निम्नलिखित गद्यांश में से संज्ञा के भेदों को पहचानकर लिखिए।

गोपी अपनी छोटी बहन कजरी के साथ भीड़ से होकर सुंदरपुर में लगने वाले हाट की ओर जा रहा था। उसकी माँ लक्ष्मी ने उसे चावल और दाल खरीद कर लाने की आज्ञा दी थी। रास्ते में उसे कालू मिल गया। गोपी ने उसे लकड़ी के कोयले पर पकाए गए भुट्टे खाने को दिए। फिर दोनों ने पानी पिया। कालू ने भी उसे फूलों का गुच्छा दिया और सिर पर लकड़ी का गट्ठर रखकर अपनी भैंसों के साथ गाँव की ओर चल पड़ा। इसी बीच न जाने कैसे चतुरी नामक उसकी एक भेड़ झुंड से बिछुड़ गई और दूसरे गाँव जा पहुँची। कालू को घर आने पर इस बात की जानकारी हुई। उसका मन उदास हो गया।



व्यक्तिवाचक

जातिवाचक

समूह वाचक

द्रव्य वाचक

_____	_____	_____	_____
_____	_____	_____	_____
_____	_____	_____	_____
_____	_____	_____	_____
_____	_____	_____	_____

प्रश्न 7 निम्नलिखित वाक्यों में उचित विराम चिन्ह लगाएं:-

- (क) छिः कितनी गंदगी है  
(ख) रीमा अजय और मयंक आए  
(ग) मीरा पायल और दिव्या कब आए  
(घ) तुम देर क्यों कर रहे हो  
(ङ) आज मौसम बहुत सुहावना है

### कार्य प्रपत्र 2

प्रश्न 1 नीचे दिए गए शब्दों में अन्य शब्द जोड़कर योग शब्द बनाएं-

(क) रेल	+	.....	=	.....
(ख) पाठ	+	.....	=	.....
(ग) विद्या	+	.....	=	.....
(घ) रसोई	+	.....	=	.....
(ङ) डाक	+	.....	=	.....
(च) पुस्तक	+	.....	=	.....
(छ) दवा	+	.....	=	.....
(ज) फूल	+	.....	=	.....

प्रश्न 2 दिए गए चित्रों के लिए तीन-तीन पर्यायवाची शब्द लिखिए-



- (क) \_\_\_\_\_  
(ख) \_\_\_\_\_  
(ग) \_\_\_\_\_



- (क) \_\_\_\_\_  
(ख) \_\_\_\_\_  
(ग) \_\_\_\_\_



- (क) \_\_\_\_\_  
(ख) \_\_\_\_\_  
(ग) \_\_\_\_\_



- (क) \_\_\_\_\_  
(ख) \_\_\_\_\_  
(ग) \_\_\_\_\_



- (क) \_\_\_\_\_  
(ख) \_\_\_\_\_  
(ग) \_\_\_\_\_



- (क) \_\_\_\_\_  
(ख) \_\_\_\_\_  
(ग) \_\_\_\_\_





प्रश्न 1 दिए गए चित्र एवं संकेतों के आधार पर इस कहानी को शीर्षक एवं शिक्षा सहित लिखिए-  
एक थी -----और एक था-----। दोनों दोस्त थे। एक दिन----बोला,"----- बहन, मैं भी तुम्हारे साथ तैरना चाहता हूँ।"-----बोली,"अच्छा, कोई तरीका सोचते हैं। उसे -----में एक -----दिखाई दी।-----उस-----को-----के पास खींच लाई। वह बोली, "----- भाई, इस -----में बैठ जाओ।"-----बैठ गया। -----ने-----को धक्का दिया। -----गई पानी में और तैरने लगी। साथ में-----थी।दोनों बहुत खुश थे



प्रश्न 2 मोबाइल फोन के लाभ या हानि विषय पर अनुच्छेद लिखें।

प्रश्न 3 विराम चिन्हों को दर्शाते हुए फ्लैश कार्ड तैयार करें।

प्रश्न 4 पृथ्वी को नष्ट होने से बचाने के लिए हमें क्या क्या करना होगा? चित्र के माध्यम से समझाइए।

प्रश्न 5 भारत की प्रमुख फसल कौन कौन सी है? ये फसले हमारे लिए क्यों जरूरी है लिखिए।

## MATHS

Instructions:

Learn tables 2 to 20

Revise all the chapters 1 to 4 and Solve the review exercise of chapter 1 to 4 in a practice notebook.

Solve the given worksheets on A4 size ruler sheets and organize them in a folder.

Worksheet -1

Q1. Write 814008250 both in Indian number system and International number system Also write the number name:

International Indian

Number. \_\_\_\_\_.

Number Name. \_\_\_\_\_.



Q2. Write the numbers corresponding to the following number names.

- a) Forty seven crore ninety one lakh two hundred sixteen \_\_\_\_\_.
- b) Four hundred fifty-six million seventy-one thousand nine hundred thirty -eight \_\_\_\_\_.
- c) Thirteen lakh twenty -four thousand nine hundred sixty-nine \_\_\_\_\_.
- d) Ninety-two million four hundred one thousand eleven \_\_\_\_\_.

Q3. Write in words:

- a) 9,89,00,999
- b) 42,342,242
- c) 570,209,390
- d) 1,00,001

Q4. Fill in the blanks.

- 1. In 90,07,831; 9 is in the \_\_\_ place and 8 is in the \_\_\_ place.
- 2. In 12,53,04,006; 1 is in the \_\_\_ place and 3 is in the \_\_\_ place.

Q5. The expanded form of 99,00,999 is \_\_\_\_\_.

Q6. The short form of  $80,00,000+7,00,000+5000+300+1$  is \_\_\_\_\_.

Q7. The standard form of 10 crores + 12 lakhs + 9 tens thousand + 4 hundreds + 5 ones is \_\_\_\_\_.

Q8. The predecessor of 47,00,000 is \_\_\_\_\_.

Q9. The successor of 19,999 is \_\_\_\_\_.

Q10.. The number between 9999 and 10001 is \_\_\_\_\_.

Q11. Find the difference between the place value of:

- (a) Three fours in 46,04,479
- (b) Two sevens in 17,479

Q12. Form the largest and the smallest possible number made from each of the following groups of digits (if repetitions of digits is not allowed):

- (a) 4, 3, 5, 0, 2
- (b) 5, 0, 1, 2, 3, 7





Q13. Write the number for the given expanded forms:

(a)  $80,00,00,000 + 2,00,00,000 + 30,00,000 + 5,00,000 + 80,000 + 3,000 + 700 + 40$

(b)  $3,00,00,000 + 40,00,000 + 20,000 + 8,000 + 90 + 4$

Q14. Write in ascending order: 48,28,632; 19,95,764; 35,37,286; 49,86,632

Q15. Write in descending order: 8,98,70,542 ; 49,00,796 ; 2,43,98,764 ; 8,98,75,543

Q16. Compare: 38,29,763 \_\_\_\_\_ 38,79,703

Q17. Write the following in Hindu-Arabic numerals

(a) CDXC

(b) MCMLXXIX

18. Compare orally use  $>$ ,  $<$  or  $=$  in the blanks:

(a) XIX \_\_\_\_\_ XC

(b) XCVI \_\_\_\_\_ LXVI

Q19. Solve the given Roman numeral and write the answer in the box:

(a) L-X =

(b) XLII+XXIX =

(c) LXIII  $\div$  VII =

(d) CM  $\times$  IX =

Q20. Write the following in Roman numerals.

(a) 56

(b) 162

(c) 1158.

(d) 2984

## WORKSHEET -2

Q1. Solve

(a)  $165938903 + 281627862$

(b)  $765428097 + 89356893 + 859837$

(c)  $72757580 - 3275851$

(d)  $88447907 - 88446998$

Q2. What must be added to 70,62,369 to make it equal to eighty lakh?

Q3. What will be the difference of the largest 7-digit number and the smallest 3-digit number?



Q4. Find the sum of the largest 4-digit number and the smallest 4-digit number.

Q5. By how much is 8,97,12,000 greater than 5,88,48,432?

Q6. The sum of two numbers is 8,54,639. One of them is 98,708. Find the other.







Q7. In an election there were three candidates A, B and C. Candidate A got 5,65,68,496 votes, Candidate B got 6,68,35,608 votes. If the total number of votes was 22,36,50,608, how many votes did Candidate C get? Who won the election?

Q8. Subtract 16123 from 165943 and check your answer.

Q9. Tickle your Brain

Kirti is a very helpful girl. She always gives things to needy people. Today, she has to distribute 156 biscuits among 6 street dogs. Help her divide the biscuits equally.

Number of biscuits for each

					
<input type="text"/>	<input type="text"/>	<input type="text"/>	<input type="text"/>	<input type="text"/>	<input type="text"/>

### **WORKSHEET -3**

Q1. Solve:

a)  $32572 \times 346$

b)  $45203 \times 5231$

c)  $7009 \times 500$

d)  $321579 \div 786$

e)  $125000 \div 1000$

Q2. A builder constructs 235 flats in a society. If each flat costs Rs. 49,60,400, what is the total cost of all the flats?

Q3. Divide the greatest 8-digit number by the greatest 3-digit number.

Q4. Ravi earns Rs. 97,080 in a year. What is his monthly earning?

Q5. Tickle your Brain

Kirti is very good at adding numbers but gets confused when there is repetitive addition. Help her in understanding repetitive addition.

1. Repetitive addition is known as M\_\_T\_\_P L I\_\_T\_\_.

2.  $88 + 88 + 88 + 88 = \underline{\quad} \times 88 = \underline{\quad}$

3.  $230 + 230 + 230 + 230 + 230 + 230 + 230 + 230 + 230 + 230 = 10 \times \underline{\quad} = \underline{\quad}$

4.  $0 + 0 + 0 + 0 + 0 = \underline{\quad} \times \underline{\quad} = \underline{\quad}$





## WORKSHEET -4

Mental Maths-

- 1)  $28456 + 34509 = \underline{\hspace{2cm}} + 28456$
- 2)  $CCXXIX = \underline{\hspace{1cm}} + 20 + \underline{\hspace{1cm}} = \underline{\hspace{2cm}}$
- 3)  $0 \times 1543 = \underline{\hspace{2cm}}$
- 4)  $9172 - \underline{\hspace{1cm}} = 9172$
- 5)  $2567 \times 0 = \underline{\hspace{2cm}}$
- 6)  $1357 \times 1 = \underline{\hspace{2cm}}$
- 7)  $572 \times \underline{\hspace{1cm}} = \underline{\hspace{1cm}} \times 732$
- 8)  $175 \div 0 = \underline{\hspace{2cm}}$
- 9)  $6087 \times 1000 = \underline{\hspace{2cm}}$
- 10) One lakh =  $\underline{\hspace{1cm}}$  thousand
- 11) Hundreds place is in  $\underline{\hspace{1cm}}$  period.
- 12) 100 more than 39,999 is  $\underline{\hspace{2cm}}$ .
- 13)  $30 \times 150 \times 100 = \underline{\hspace{2cm}}$
- 14)  $6500 \div 13 = \underline{\hspace{2cm}}$
- 15)  $91,783 - 11,022 + 35,428 = \underline{\hspace{2cm}}$
- 16) 144 years =  $\underline{\hspace{1cm}}$  months
- 17)  $0 \div 9999 = \underline{\hspace{2cm}}$
- 18)  $15 + 15 + 15 + 15 = \underline{\hspace{1cm}} \times 15 = \underline{\hspace{2cm}}$
- 19) 96 bananas =  $\underline{\hspace{1cm}}$  dozen bananas
- 20)  $2,40,701 \div 1000 = Q = \underline{\hspace{1cm}}, R = \underline{\hspace{1cm}}$

### CHALLENGE!

1. Write the greatest 8-digit odd number using three digits only.
2. Write the smallest 3-digit number with all the different digits in Roman numerals.



3. Fill in the missing digits:

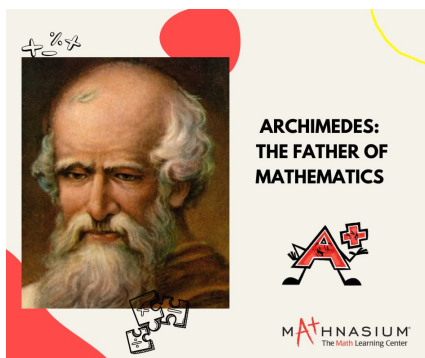
$$\begin{array}{r} \square 6 \square 2 1 8 \\ + 5 2 6 \square \square \square \\ \hline 9 \square 9 1 9 0 \\ \hline \end{array}$$

### PROJECT WORK

Note: Prepare working model/ Project. You can take help of internet. Use your creativity to make it attractive and beautiful.

1. Prepare a working model of place value table of 6 digits. (Roli No. 1 to 9)
2. Make a robot on A-4 size sheet using Basic geometrical shapes ( Square, Rectangle, Triangle.....).( Roll No. (10 - 18)
3. Prepare a division working model or division machine to learn a long division method.( Roll No. 19-27).
4. Prepare a working model of maths multiplication calculator ( Roll No. 27 onwards)
5. Collect information of any one of the famous mathematician. Write it on A-4 size sheet beautifully.

E.g.





Roll no (1-35)





## SCIENCE

Q1) Given below are some poster pictures what do they say and which part of the environment are they targeting to save?

	Save .....
	It says .....
	.....
	.....
	Save .....
	It says .....
	.....
	.....
	Save .....
	It says .....
	.....
	.....
	Save .....
	It says .....
	.....
	.....

Q2) Rewrite the given statements correctly.

- 1) About 100% of the human body is made-up of water.
- 2) Vitamins are built by bodybuilding nutrients.
- 3) Calcium helps in the production of haemoglobin.
- 4) Water is an energy giving nutrient.
- 5) Rice is an example of rabi crop.
- 6) Baby plant is the outer covering of the seed.





Q3) Find the meaning of the term Reduce Reuse and Recycle what is the difference between these terms? Give examples to support it and draw picture.

**Q4) Answer the following questions**

- A) What is a balanced diet? Name the five components of a balanced diet.
- B) Name the two important components needed by the body apart from nutrients. Why is it important to drink water?
- C) Write the difference between communicable and non-communicable diseases?
- D) Do humans also help in seed dispersal? How? Give an example.
- E) How do animals help in seed dispersal?

**Q5) Tick the correct option-**

- 1) Which of these help in strengthening of bones?  
a) Carbohydrates b) Minerals. c) Fats. d) proteins
- 2) Which one is not a waterborne disease  
a) goiter b) typhoid c) cholera d) diarrhoea
- 3) Underground stem like potato and ginger have \_\_\_\_ on them  
a) ears b) nose c) eyes d) mouth
- 4) Seed leaves are also known as  
a) cotyledon b) seedling c) plant d) seed coat
- 5) Cabbage and cauliflower is an example of  
a) rabi crop b) kharif crop c) both A&B d) none of these

**Q) Fill in the blanks**

- 1) Chemicals used for destroying harmful insects are called \_\_\_\_\_.
- 2) The practice of growing plants on a large scale is called \_\_\_\_\_.
- 3) A \_\_\_\_ is an abnormal condition in which the body is not able to function properly
- 4) \_\_\_\_\_ causes disease like malaria and amoebic dysentery.

**Q) HOTS**

- 1) Mohan has got two fractures in the past three months the doctor has advised him to have two glasses of milk daily with lots of green vegetable. Can you tell the reason why?
- 2) Firemen crawl on the floor of a room that is filled with smoke. Give reason to support your answer.
- 3) Mrs. Sunita is planning to grow tea in Rajasthan. Will she be successful? Give the valid reason.





## Project:

Visit a construction site where a Mason, a Carpenter and a plumber are working. Observe them at work. What tools or instruments are they using? Write your observations in your notebook. Draw the tools.

Make a balanced diet chart required for growing child depicting all the important food components.

### Q) Fill in the blanks and find the word given below in the figure.

1. A fire extinguisher sprays foam or gas to cut off the supply of \_\_\_\_\_.
2. A person who is injured is called a \_\_\_\_\_.
3. The device used to put out fire is \_\_\_\_\_.
4. An elastic bandage can be wrapped around a \_\_\_\_\_ part.
5. In case of burn we must first apply \_\_\_\_\_.
6. A dog bite may cause \_\_\_\_\_.
7. Fire caused by electricity should never be put out by using \_\_\_\_\_.
8. A broken bone is called as \_\_\_\_\_.
9. In case of sting apply \_\_\_\_\_ to neutralize the effect of sting.
10. Avoid going near fire with \_\_\_\_\_ clothes on.

Name: \_\_\_\_\_

## FIRST AID KIT

### + Scramble +

F	R	A	C	T	U	R	E	B	Z
M	P	L	A	S	T	E	R	L	U
E	K	W	N	P	I	C	L	O	T
D	B	K	S	R	J	O	Q	O	L
I	U	I	R	A	H	V	C	D	L
C	V	T	A	I	C	E	R	S	Z
I	T	H	E	N	I	R	O	W	R
N	B	T	U	R	E	Y	Y	F	Z
E	U	P	B	A	N	D	A	G	E

Plaster	Fracture	CPR
Recovery	Clot	Airway
Sprain	Blood	Kit
Bandage	Ice	Medicine



## SOCIAL STUDIES

Q1. Fill in the blanks:

- 1.The movement of the earth on its own axis is called \_\_\_\_\_.
- 2.An imaginary line midway between North pole and South pole is called \_\_\_\_\_.
- 3.Erdapfel was made by \_\_\_\_\_ in 1942.
- 4.The Earth revolves along a fixed path called \_\_\_\_\_.
- 5.When it is summer in the Northern hemisphere, the Southern hemisphere experiences \_\_\_\_\_.

Q2. Give one word answer:

- 1.A representation of the Earth's surface or a part of it on a flat surface - \_\_\_\_\_
- 2.Flat and low -lying land surfaces are called \_\_\_\_\_.
- 3.A deep valley with steep sides made of rock - \_\_\_\_\_.
- 4.Name a place near London which was decided as the starting point for numbering meridians.
5. Shades of brown are used to represent \_\_\_\_\_ on a map .

Q3. Match the following:

- |                    |                           |
|--------------------|---------------------------|
| 1. Political map   | North, South, East & West |
| 2.Plateau          | peak                      |
| 3.Major directions | countries and capitals    |
| 4.Desert           | tableland                 |
| 5.Mountain         | sand dunes                |

Q4. State true or false:

- 1.All parallels are of same length.
- 2.Plains and mountains are shown in different colours.
- 3.The network of parallels and meridians on the globe is called a grid.
- 4.Gerardus Mercator, a Flemish map maker, was the first to publish a collection of maps in the form of a book.
- 5.There are 360 parallels in all ,including the equator.





Q5. Read the clues and solve the puzzle.

**ACROSS**

- Horizontal lines on a globe
- Vertical lines on a globe
- The ratio between distance on the ground and distance on a map
- This is the longest parallel.

**DOWN**

- The Prime Meridian runs through this place.
- A flat low-lying land surface.
- A model of the Earth
- The movement of the Earth on its axis.

Q6. On the map given below, write the names of the continents and the oceans.







## Q7. HOTS

1. In which season do the people of Australia celebrate Christmas ? Why?
2. The length of a parallel increases as we move away from the poles towards the equator. Why?

## PROJECT WORK

1. Make a creative and beautiful chart on any one planet according to your roll no. :

Roll no. 1 to 10 Mercury/Venus

Roll no. 11 to 20 Earth/Mars

Roll no. 21 to 30 Jupiter/Saturn

Roll no. 31 to 33 Uranus/Neptune

2. For all the students, record the time of sunrise and time of sunset of a week.

3. Make a model of Rotation of the Earth that causes day and night.

Or

Make a model on Revolution of the Earth that causes change of seasons.

## स्कृत

प्रश्न 1 अधोलिखितशब्दानां वर्ण-विच्छेदं कुरुत-

(अधोलिखित शब्दों का वर्ण-विच्छेद कीजिए)-

(क) कमलम् -

(ख) आश्रमः -

(ग) उद्यानम् -

(घ) सर्वज्ञः -

प्रश्न -2 चित्राणि दृष्ट्वा तेषां नामानि प्रकारः च लिखत-

(चित्रों को देखकर उनके नाम और प्रकार लिखिए)-


(क)



(ख)



(ग)



.....  
काकः

.....

.....

.....  
अकारान्तः

.....

.....

(घ)



(ङ)



(च)



.....

.....

.....

.....

.....

.....





प्रश्न - 3 अधोलिखितानां वर्ण-संयोजनं कुरुत-  
(निम्नलिखित वर्णों का वर्ण-संयोजन कीजिए-)

- (क) क् + ऋ + ष् + अ + क् + अः  
(ख) भ् + अ + क् + त् + अः  
(ग) ज् + अ + न् + अ + न् + ई  
(घ) प् + उ + स् + त् + अ + क् + अ + म्

प्रश्न 4 अधोलिखितानां प्रश्नानि उत्तरत लिखत।

1. स्वराः कति सन्ति?
2. व्यञ्जनानि कति सन्ति?
3. कवर्गों कति व्यञ्जनानि सन्ति?
4. स्वराणां के के भेदाः सन्ति?
5. व्यञ्जनानाम् उच्चारणे केषां सहायता अपेक्षिता?

प्रश्न -5 अधोलिखितशब्दानाम् अर्थं वदत।

(नीचे लिखे शब्दों का अर्थ बताइए-)

- (क) वानरः (ख) मीनौ  
(ग) दीपकः (घ) मयूरः  
(ङ) घटः (च) चमसः



प्रश्न -6

निम्नलिखितशब्दान् लिंगानुसारेण पृथक् कुरुत- (निम्नलिखित शब्दों को लिंग के अनुसार अलग-अलग कीजिए)-

मञ्जूषा					
पादत्राणम्	घटिका	उपनेत्रम्	सूर्यः	आसन्दिका	
मेघः	व्यजनम्	बालिका	पर्वतः		

पुंल्लिंगम्	स्त्रीलिंगम्	नपुसंकलिंगम्
.....	.....	.....
.....	.....	.....
.....	.....	.....

प्रश्न -7 नीचे दी गई वर्ग-पहेली में पक्षियों एवं पशुओं के नाम हैं। उन्हें चुनकर लिखिए-

पशुनां नामानि	क	पो	तः	म	सिं	हः	खगानां नामानि
.....	हं	ग	जः	म	यू	रः	.....
.....	सः	अ	उ	ग	द	शु	.....
.....	पः	श्वः	ष्ट्रः	दं	का	कः	.....
.....	कु	क्कु	रः	भः	छा	त्रः	.....
.....	पा	द	पः	मी	नः	र	.....



प्रश्न 8 चित्राणि दृष्ट्वा संस्कृतपदानि लिखत-

(चित्रों को देखकर संस्कृत शब्द लिखिए )



### रचनात्मक कार्य

प्रश्न 1 चित्र को देखकर उसमें आए पुल्लिंग, स्त्रीलिंग, नपुंसकलिंग शब्दों के नाम संस्कृत भाषा में लिखें।



प्रश्न 2 संस्कृत की पाठ्यपुस्तक का प्रथमः व द्वितीयः पाठः याद करना है।

प्रश्न 3 संस्कृत की दस सूक्तियों का संकलन कर लिखना व याद करना है।

प्रश्न 4 भारतीय महीनों, वार के नाम संस्कृत में लिखना व याद करना है।

प्रश्न 5 कोई भी अपनी पसंद की पांच श्लोक, चौपाई अर्थ सहित याद करें।

निर्देश:- सभी लेखन कार्य संस्कृत की(अतिरिक्त कॉपी) में ही करेंगे।

### COMPUTER

Q1) Fill in the blanks

1)\_\_\_\_\_is the shortcut key to find text.

2) Word 2021 allows a user to format text by changing the \_\_\_\_\_, size, color and style.





3) To save a document in Word 2021, a user can click on the \_\_\_\_\_ button.

4) Microsoft Word 2021 is a software program used for creating editing and \_\_\_\_\_ document.

5) Window 11 is the latest version of the \_\_\_\_\_ operating system developed by Microsoft.

Q2) Multiple choice questions

1) What is Microsoft Word 2021?

a) Cooking app b) Video editing software c) Word processing d) Social media player.

2) Which of the following is an advanced feature in Microsoft Word 2021

a) Changing font size b) Adding page number c) Creating a table of content d) Typing text.

3) \_\_\_\_\_ is the shortcut key to replace text

a) Alt +F. b) Alt+D. c) Alt+F5. d) Ctrl+H

4) What is the shortcut key to switch between different app?

a) Alt +shift. b) Alt + tab c) Alt + enter. d) Alt +A5

5) \_\_\_\_\_ refers to the design or appearance of a character

a) Font. b) Texture. c) Number d) Keyboard

Q3) Answer the following questions

1) What are the component of a File Explorer?

2) Write the steps to run the disk cleanup.

3) How can you add bullets or number to a text? Write in steps.

4) Define the term -a) Justify b) Center.

Q4) Rearrange the following words

a) TDESAKOB.R

b) KRSTAAB

c) ROETEPARS

d) CTSFUNIO

e) EBSTTAUCIFON



Q5) Design a poster using Microsoft Word 2021 to promote an event and activity of your choice, for example School Fare, Sports day or a Movie Night.

Use word feature to add text shape and make your poster eye-catching take the print out and paste the hand copy of the poster in your computer notebook.

### GENERAL KNOWLEDGE

1. Make a beautiful collage on A 3 sheet with the help of newspaper headlines related to ongoing elections.

2. Research about any one of the following cricket players Rohit Sharma, Virat Kohli, M.S Dhoni, Hardik Pandya and write a brief essay considering their achievements in life.

3. If you were to invent a new device- what would it be? And what would be its role in our society?

Do this on A3 sized sheet. Also draw the picture of the device.

### ART AND CRAFT

Q. Use your creativity and imagination to make a Pen Stand. Use waste material available at home.



\*\*\*\*\*