



ADARSH VIDYA NIKETAN

SENIOR SECONDARY SCHOOL

HOLIDAY HOMEWORK OF CLASS-IV (2022-23)

My Homework Folder

Name _____





Dear Students,

It's holiday time once again! Time for fun and learning!

Here are few important points which will make your summer break a really fruitful one-

- ✓ Books are your best friends, so make sure you read a lot of books and enhance your knowledge and vocabulary.
- ✓ Try to acquire a new skill, learn a new song, play an instrument, improve your handwriting or something of your interest to unravel the artist in you.
- ✓ Contribute to save our precious environment. Minimize the wastage of resources like electricity, water etc.
- ✓ Do tasks that you can easily accomplish like filling water bottles, folding clothes, watering the plants etc.
- ✓ Plan some e-visits and virtual field trips and explore some online resources like Creative Bug and Brain Fitness.

The holiday homework has been very carefully designed to help you recapitulate the concepts done in class and stay connected with your lessons.

Please note the below instructions-

- ☞ The worksheets must be done in a very neat and presentable manner in subject fair notebooks.
- ☞ No need to write the questions. Only answers are sufficient.
- ☞ Print out of holiday homework is not required.
- ☞ Revise the syllabus and concepts covered in class till now

Wishing you a happy and fun-filled vacation! Stay Home, Stay Safe!



ENGLISH

Instructions:- All the work is to be done in grammar notebook.

Work should be done in neat and clean handwriting.

WORKSHEET-1 (READING AND GRAMMAR)

A. Read the passage carefully and answer the given questions.

Once a cunning jackal jumped into a big tub of blue dye. He looked himself in the reflection of water. "I am your King," he said. All the animals, big and small believed him and bowed before him. The clever jackal smiled. Now he was the most powerful animal in the forest. He was proud to be a king. Once, the jackal woke up in the middle of the night. The jackals in the forest were howling at the full moon in the sky. The blue jackal forgot he was a King. He, too, began to howl. "Hu...aah! Hu...aah!" he cried. The animals ran out to see. "He is not a king. He is just a jackal!" they shouted. They rushed to attack him. "Stop, stop! I am sorry I tricked you. Please do not kill me!" said The blue jackal. The animals forgave him, but only after giving the jackal a good beating.

Questions:-

1. Who jumped into a big tub of blue dye?
2. Why did the animals think that the jackal was a king?
3. How did the jackal become blue?
4. Find out opposites of the followings from the passage.

Queen -

Day -

B. Underline the Predicate in each of these sentences.

1. The snake caught the frog.
2. She is eating an ice-cream.
3. The children are singing rhymes.

C. Choose a subject and complete each sentence.

The doctor - My notebook – My closet

1. _____ is filled with stories that I wrote.
2. _____ has lots of clothes in it.
3. _____ checked my vision.



D. Re-arrange the following words to form a correct sentence.

1. Birds are the of the crow scare afraid
2. Match the will boys play football a
3. Playing were in the house the Doll's girls

WORKSHEET -2 GRAMMAR (NOUNS AND VERBS)

A. Underline the common nouns and circle the proper nouns.

1. I've just read a play by Shakespeare.
2. The Drama Club elected a new president.
3. Soon our family plans to visit Miami.
4. A new house is being built on Elm .

B. Change the gender of the noun.

1. My sister lives in Nongpoh.
2. My grandmother is nearly eighty years old.
3. Mr. Bhatia's niece is a software professional.

C. Rewrite the following sentences using the plural forms of the nouns and making appropriate changes to the other words.

1. There is a picture on the wall.
2. That is not a worm: It is a snake.
3. Is there a box of chocolate on the table?

D. Circle the action verb in each sentence.

1. Rohan listens to his favorite song.
2. Craig hits the baseball over the fence.
3. The little pig grunts.
4. The roof of the house leaks.
5. The hunter searches for a deer.

WORKSHEET -3 (CREATIVE WRITING)

Think of someone whom you consider to be your hero. What makes this person heroic? Make a card for this heroic person of your life , paste his/her photographs. Describe his/her heroic characteristics in about 80 words in that card. You can present this card as a gesture of regards to your hero. Take a click and share it with your teacher.

समस्त ग्रीष्मकालीन गृह कार्य अपनी व्याकरण की उत्तर पुस्तिका (कापी) में त्रुटिविहीन (त्रुटियों के बिना) और सुंदर लेख में कीजिए।

कार्य पत्रिका -1

1. नीचे दिए गए वाक्यों में उचित शब्द भरकर रिक्त स्थानों की पूर्ति कीजिए-

(क) भावों और विचारों को जब बोलकर या लिखकर प्रकट किया जाता है, तो उसे _____ कहते हैं।
(ध्वनि / वर्ण / भाषा)

(ख) भाषा के _____ रूप होते हैं। (तीन / चार / दो)

(ग) बोलकर या सुनकर जब दूसरों के विचार हम तक पहुँचते हैं, तो उसे भाषा का _____ रूप कहते हैं। (मौखिक / लिखित)

(घ) लिखने व पढ़ने से जब विचार एक स्थान से दूसरे स्थान तक पहुँचते हैं, तो उसे _____ भाषा कहते हैं। (सांकेतिक / लिखित)

2. सही मिलान कीजिए-

(क) असम	बंगाली
(ख) बंगाल	रूसी
(ग) इंग्लैंड	फ्रांसीसी
(घ) फ्रांस	चीनी
(ङ) चीन	असमिया
(च) रूस	अंग्रेज़ी

3. दिए गए वाक्यों में सही के आगे (✓) और गलत के आगे (×) का निशान लगाइए-

- (क) भारत की राष्ट्रभाषा हिंदी है।
(ख) हिंदी, मराठी तथा गुजराती की लिपि देवनागरी है।
(ग) अंग्रेज़ी की लिपि रोमन है।
(घ) उर्दू की लिपि फ़ारसी नहीं है।

4. सही उत्तर चुनिए।

(क) इस शब्द में ऋ की मात्रा लगी है-

ऋण ☐ श्रीमान ☐ शृंगार ☐

(ख) न् + म से बने संयुक्ताक्षर वाला शब्द है-

जन्म ☐ निम्न ☐ नमन ☐

(ग) इस शब्द में ढ व्यंजन आया है-

गड्ढा ☐ पढ़ाई ☐ ढक्कन ☐

5. शुद्ध वर्तनी पहचानिए और (○) लगाइए-

(क) परिक्षा	पीरच्छा	परीक्षा
(ख) परेशानि	परेशानी	परीशानी
(ग) चिड़ियाँ	चीड़ियाँ	चिड़ीयाँ

6. दिए गए शब्दों को मिलाकर यौगिक शब्द बनाइए-

(क) पाठ + शाला =

(ख) रसोई + घर =

(ग) विद्या + अर्थी =

7. चित्र देखिए और भाषा के सही रूप का नाम लिखिए-



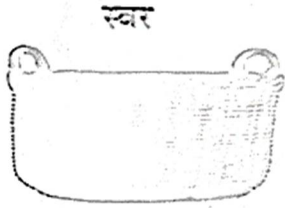
8. नीचे दिए गए चित्र देखिए और उन चित्रों पर सही (✓) का निशान लगाइए, जिनके लिए भाषा की आवश्यकता होती है-



कार्य पत्रिका -2

1. नीचे सभी स्वर और व्यंजन मिल गए हैं, इन्हें अलग-अलग टोकरीयों में डालिए-

अ ओ आ ऋ ऊ ए ऐ उ ई इ औ च ग घ छ ज ङ क
ख ज द त ढ ठ ट ड ध थ ण (ड़, ढ़) न र प
म य ब ल भ फ व श ष ह त्र स क्ष ज्ञ





2. शब्दों को सही क्रम में प्रयुक्त करके वाक्य बनाइए-

(क) विद्यालय में एक अध्यापिका थीं एक।


(ख) आज-कल युग में कंप्यूटर का महत्व के है बहुत।

(ग) कहा लाल बहादुर शास्त्री ने किसान जय जवान जय।

3. दिए गए चित्रों को देखकर बताइए कि लिखते समय इनके नामों में कौन-कौन-सी मात्राएँ आएँगी-



(क) शब्द
मात्रा



(ख) शब्द
मात्रा



(ग) शब्द
मात्रा

4. दी गई ध्वनियों वाले दो-दो शब्द लिखिए-

(क) अनुस्वार
(ख) अनुनासिक
(ग) संयुक्त व्यंजन
(घ) द्वित्व व्यंजन

5. 'र' के विभिन्न रूपों का प्रयोग करके शब्द बनाइए-

(क) कम (ख) कम (ग) कम

6. दिए गए चित्रों में रंग भरिए तथा सदैव स्त्रीलिंग व सदैव पुल्लिंग शब्दों को उचित स्थान पर लिखिए-



.....




.....

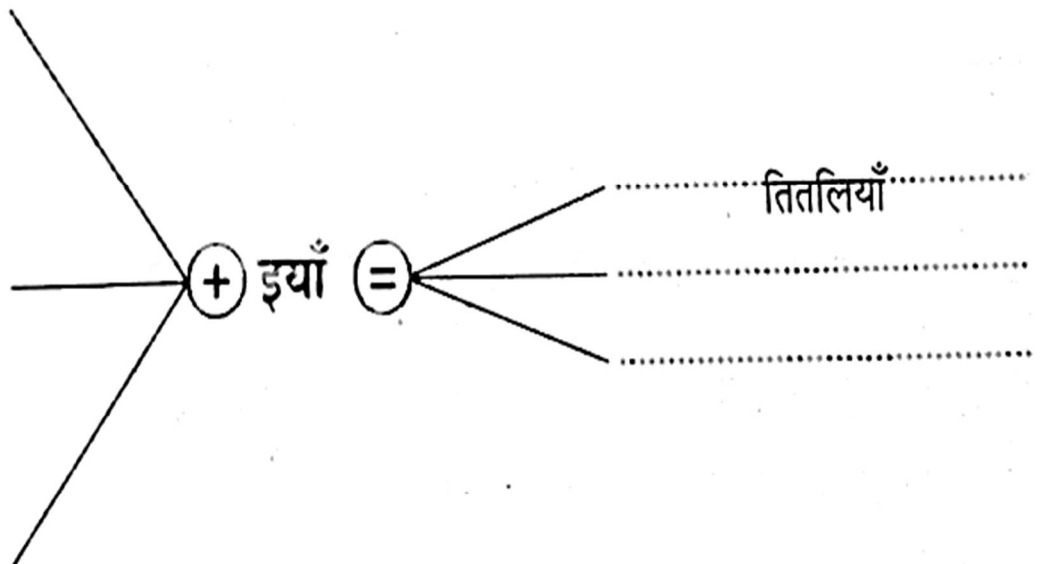
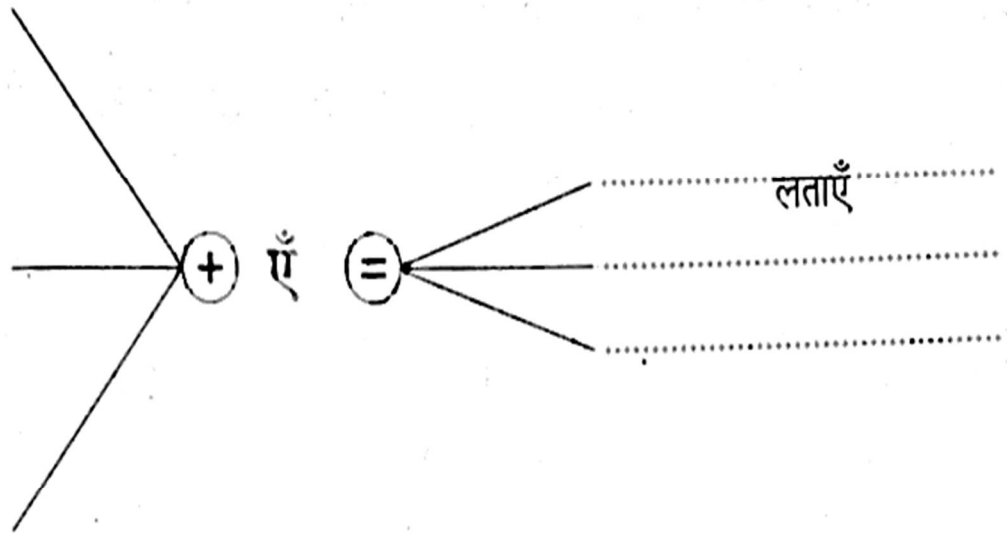


कार्य पत्रिका -3

1. पतंग को शब्दों की डोर दीजिए-



2. उदाहरण समझिए और चित्रों के नाम बहुवचन रूप में लिखिए।



3. विशेषण शब्दों से कहानी पूरी कीजिए।

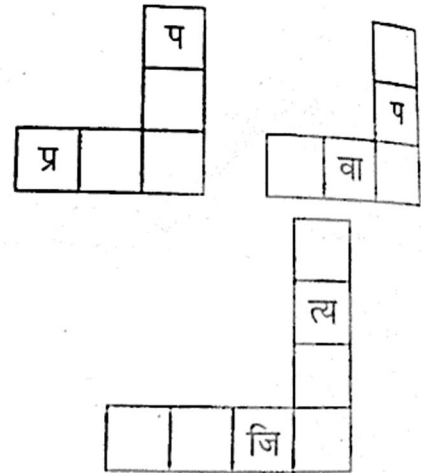


_____ पेड़ पर _____ कौआ बैठा था। वह _____ फल खा रहा था। पेड़ _____ था।
पूरे साल _____ फल देता था। पक्षी उस पर अपने _____ घोंसले बनाते थे। एक दिन एक
_____ लकड़हारा आया। उसे _____ लकड़ी, _____ फल, _____ पत्तियाँ सब कुछ
चाहिए था। उसने सोचा क्यों न इस _____ पेड़ को ही काट दिया जाए। उसने पेड़ काटना शुरू किया।
सभी पक्षी _____ से चिल्लाने लगे। यह देख कर लकड़हारा समझ गया कि मुझे पेड़ नहीं काटना
चाहिए।



4. नीचे दिए गए अनुच्छेद में प्रयुक्त अशुद्ध शब्दों को रेखांकित कीजिए। उनके शुद्ध रूप जानने के लिए दिए गए खानों में छूटे वर्ण भरिए—

रोहन परिक्षा देने के बाद परिणाम आने की प्रतीक्षा में था। उसके उपर दबाव था कि वह असफलता की दिवार तोड़ दे। उसने अत्याधिक मेहनत की थी। यहाँ तक कि उसने समाजिक कामों में भी भाग लेना छोड़ दिया था।



MATHEMATICS

WORKSHEET – 1

TOPIC :- NUMBERS

- Write the number names –
 - 53012 -- _____
 - 940067--- _____
- Arrange 20183, 120625, 19398, 27910, 1427 in ascending order.
- Write the greatest and smallest numbers of 5 digits with 4, 0, 3.
Greatest number _____
Smallest number _____
- Write in figures –
 - Twenty thousand one hundred nine _____.
 - Two lakh seventy nine thousand fifteen _____.
- Write the face value and the place value of the coloured digits—
 - 45602
 - 318240
 - 506723
 - 984601



6. Write the following numbers in standard form –
- $500000 + 40000 + 6000 + 200 + 10 + 7 = \underline{\hspace{2cm}}$.
 - $700000 + 3000 + 80 + 9 = \underline{\hspace{2cm}}$.
 - $40000 + 100 + 30 + 5 = \underline{\hspace{2cm}}$.
 - $800000 + 50000 + 1000 + 700 + 9 = \underline{\hspace{2cm}}$.
7. Write the expanded form for the following numbers –
- $263510 = \underline{\hspace{2cm}}$.
 - $704089 = \underline{\hspace{2cm}}$.
 - $625743 = \underline{\hspace{2cm}}$.
 - $400091 = \underline{\hspace{2cm}}$.
8. Encircle the correct answer from the given alternative answers---
- The correct break up for 60606 is –
 - $6000 + 600 + 60$
 - $60000 + 600 + 6$
 - $60000 + 6000 + 6$
 - $60000 + 600 + 60$
 - The number 214708 has
 - 214 hundreds
 - 21 thousands
 - 214 thousands
 - 2140 tens
9. Make the largest and the smallest numbers of 5 digits using the given digits. (Don't repeat the numbers)
- 8, 4, 7, 3, 1
 - 1, 2, 3, 5, 6, 0
 - 2, 7, 9, 0, 3
 - 6, 5, 4, 3, 2, 0
10. Write the smallest 5 digit number with all digits different and ending in 9.
11. Round off the following numbers to nearest Tens.
- 48759
 - 825862
12. Compare the numbers . Put $<$, $>$ or $=$ signs –
- 8412 $\underline{\hspace{1cm}}$ 7598



- b. 2030 ____ 2003
c. 5677 ____ 5677
d. $278 + 10$ ____ 278

WORKSHEET:- 2
TOPIC :- ROMAN NUMERALS

1. Write in roman numerals :

- a. 19 c. 97
b. 34 d. 53

2. Write in Hindu – Arabic numerals :

- a. XXIX c. LXIX
b. XVI d. XCI

3. Use > or < or = to make a correct statement :

- a. XXII ____ XIV
b. XXXIX ____ 53
c. 11 ____ XV
d. 69 ____ LXIX
e. 20 ____ XXV

4. Correct each statement :

- a. IXV = 16 ____
b. XVX = 25 ____

5. Encircle the correct answer from the given alternative answer :

a. The correct Roman numeral is

- (i) IIXV
(ii) XIIV
(iii) XXIV
(iv) IXIV

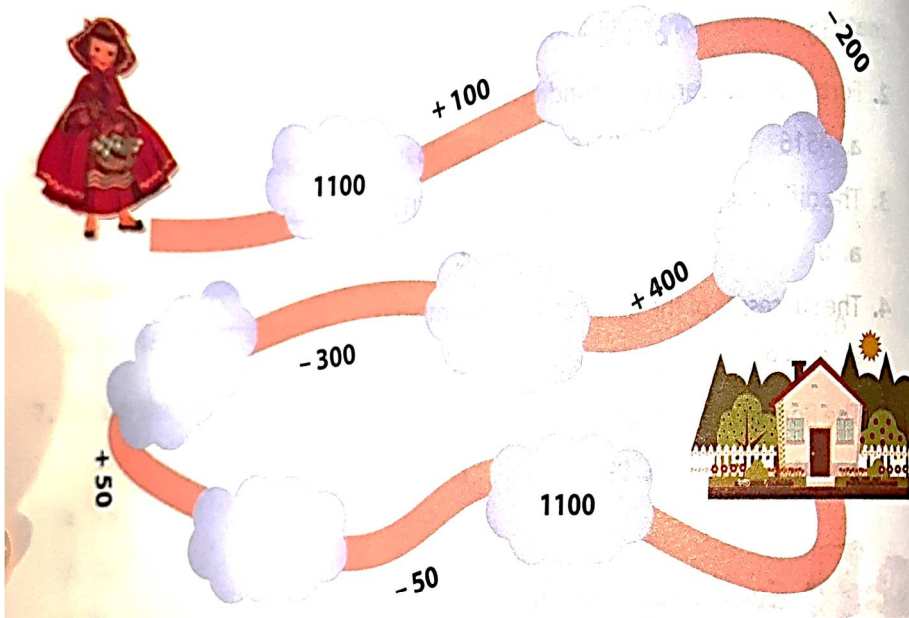
b. Using 4 matchsticks, the number of Roman numerals that can be made (upto 39) is :

- (i) 4 (iii) 2
(ii) 3 (iv) 5

WORKSHEET :- 3

TOPIC :- ADDITION AND SUBTRACTION

1. Help Little Red Riding Hood to answer the questions on her way and reach her home.



2. Tom's father bought a refrigerator for ₹ 6,325 and a television for ₹ 4,564. How much did his father pay the shopkeeper in total?

Cost price of a refrigerator =

Cost price of a television =

Total amount paid = _____

3. Add:

a. $12,308 + 46,571$

b. $34,152 + 7,604 + 21,346$

c. $22,22,222 + 33,333 + 2,01,222$

4. Arrange in columns and find the difference :

a. $2,88,389 - 1,77,277$

b. $6,33,890 - 5,22,680$

c. $88,665 - 66,554$

5. WORD PROBLEMS :

a. 47,809 girls and 56,934 boys registered for a competitive examination. Find the total number of students registered for the exam.



- b. In a school library there are 34,156 books in English , 26,874 books in Hindi and 41,083 books in other languages . How many books in all does the library have?
- c. there were 2631 bags of wheat and 4210 bags of rice in a godown. Of these 2895 bags were sold out on a day. How many bags now remained?
- d. There are 3782 cups of coffee in a café . During the day , 1529 cups of them were sold . How many cups of coffee are there now ?

6. Find the missing digits:

a.

TTh	Th	H	T	O
2		3		5
+		1		6
6	4	7	6	8

b.

TTh	Th	H	T	O
	4		2	
+	5		5	6
9	8	7	3	6

a.

8		7	5	6
-		2		
1	6	4	3	4

b.

9			9	
-		5	4	0
7	4	4	4	6

WORKSHEET :- 4

TOPIC :- MENTAL MATHS CORNER

- Sum of 0 and 1000 is _____.
- 100 more than 999 is _____.
- 6 tens and 4 ones + 8 tens and 2 ones is _____.
- The sum of the smallest 2- digit number and the greatest 3- digit number is _____.
- Forty -five thousand one hundred six is written as _____.
- The Roman numeral CI represents _____.
- $14+10+2 = 10+2+ \underline{\hspace{1cm}}$.
- Predecessor of 1100 is _____.
- $1689 - 0 = \underline{\hspace{1cm}}$.
- 10.7 thousand + 7 ones = _____.



11. Place value of 8 in 98765 is _____.

12. Hindu -Arabic numeral for XLVII is _____.

13. 6606 is _____ than 6066.

14. In a subtraction , we always write the _____ number first.

15. In a subtraction sum , we had 4 in the Ones column and 9 in the Tens column .But in Ones column ,4-7 was not possible . So we borrowed 1 from 9 . Now 4 will become _____ and 9 will become _____.

NOTE:- Learn tables 2 to 15

E.V.S.

WORK SHEET- 1

TOPIC- INSIDE OUR BODY

1.Fill in the blanks: -

- a,) The food that is not digested moves to the _____.
- b) _____ saves the stomach's wall from the acid secreted by stomach.
- c) _____ is a watery liquid secreted into the mouth by the salivary glands.
- d) The heart is divided into _____ chambers.

2. True and False

- a)The blood distributes the nutrients to all the parts of the body._____.
- b) Respiration is the process of release of energy._____
- c) Kidneys are the primary organ for breathing and respiration._____
- d) The stomach produces a yellowish fluid called bile._____

3. Choose right answer: -

1) The _____acts like a churner for our body.

- a) Heart b) Liver c) Stomach

2) The lungs are _____in colour.

- a) Redish brown b) Pinkish c) Brown

3) Which pipe is also called as Oesophagus.

- a) Windpipe b) Food Pipe c) Urine pipe

4)The process of digestion completes in _____.

- a) Liver b) Large intestine c) Small intestine

4. Who am I: -

- a) I help in the absorption of nutrients from the digested food.
- b) I am the only organ which can be regenerate by itself.



- c) I am a “J” Shaped muscular bag.
- d) I am bundle of sensory fibres in the body.

5. Answer the following questions-

- 1) Differentiate between Large Intestine and Small Intestine.
- 2) Write the functions of following-
 - a) Heart
 - b) Liver
 - c) Brain

6. Hots-

- a) Which our internal organ sends the message to our body parts? Explain how by giving an example.
- b) What will happen if Kidneys stop functioning?

WORK SHEET- 2

TOPIC- 1) TEETH AND TONGUE

2) OUR EXTENDED FAMILY

1.Fill in the blanks: -

- 1) _____ are called cracking teeth.
- 2) _____ is the hard substance in our body.
- 3) _____ & _____ all your relatives.
- 4) Mother's and Father's sister is our _____.

2. Match the following: -

<u>A</u>	<u>B</u>
1)Grinding teeth	food
2)Blood Vessels	Speech
3)Tongue	become visible
4)Exposed	Molars

3. Tick the correct option: -

- 1) Which part of the tooth hold the tooth in the jaw.
 - a) Crown
 - b) Gum
 - c) Root



2) Which type of family consist of two parents and their children who live in a household together.

a) nuclear family b) joint family c) extended family

3) Canines are _____ in numbers.

a) 4 b) 8 c) 2

4) A joint family is an _____ family.

a) extended b) external c) immediate

4. Answer the following-

1) Why should we always keep our tongue clean?

2) Write difference between maternal and Paternal family?

5. Define:

1. Plaque

2. Primary teeth

3. Tooth decay

6.. Riddle

Family Relations Riddles Extended Family	
Word Bank: *GrandFather* *GrandMother* *Grandparents* *Aunt* *Uncle* *Cousins*	
Directions: Using the word bank fill in the blanks with the answer to the riddle about your extended family.	
1. I am your mother or father's mother. I am your _____.	2. The children of your aunt and uncle are your _____.
3. I am the sister of your mother or father. I am your _____.	4. I am your mother or father's father. I am your _____.
5. Your grandmother and grandfather are called your _____.	6. I am the brother of your mother or father. I am your _____.



7. Hots

a) Is it possible for us to speak without moving our tongue? Try it out and explain your experience.

b) Which type of teeth will you use to complete the following actions: -

- Cut Banana into smaller pieces.
- Chewing a meat.
- Biting an apple
- Peeling the outer portion of sugarcane stamp.

PROJECT WORK

1) On A4 size sheet write the teeth observation of yourself and your parents (colourfully).

- Number of different types of teeth you have.
- Number of different types of teeth your parents have.

2) Make at least 5 flash cards of internal organs of our body with their functions. (Paste or draw the pictures)

For Idea and reference





COMPUTER

WORKSHEET-1

TOPIC – MEMORY AND STORAGE, WORKING WITH FILES AND FOLDERS

1) MCQ's

1. _____ stores the information temporarily.
a. ROM b. RAM c. Both of these
2. A flash drive can store up to _____ of data.
a. 1 MB b. 1 TB c. 1 KB
3. A _____ is the main secondary storage medium for computer.
a. Hard disk b. CD c. DVD
4. _____ is the default browser of windows 10.
a. Microsoft edge b. Internet explorer c. Google Chrome

2) Fill in the blanks

1. _____ provides detailed information about files, folders and drives.
2. The _____ memory is used to store the information for a long period.
3. The search tool _____ can also be used to play music, videos, set alarm, etc.

3) True or false

1. Cortana is an inbuilt feature of Microsoft edge. ()
2. The shortcut menu is also called the context menu. ()

4) One word answer

1. _____ is the default browser of windows 10.
2. Hard disk is made up of multiple disk called _____.

5) Question and answer

1. What is computer memory?
2. Why is secondary memory required?
3. What do you know about cortana?
4. State the use of the start menu.

WORKSHEET 2

TOPIC- MEMORY AND STORAGE, WORKING WITH FILES AND FOLDERS

1. Make a poster Word Document on the topic of Yoga day.



GENERAL KNOWLEDGE

PROJECT WORK

- Environmental pollution is one of the key problems faced in our modern world. Though there have been massive technological advancement in recent days, it has also invited negative effects to the environment.
Put on your imagination to state the ways that how can you save the environment.
Make a poster on “Save Environment” on A3 size sheet.
- Monuments are the inevitable part of our society. They depict various cultures tells us lot more about the past. So let us dive into these monuments to know more about them.
Paste pictures of five monuments of India on A4 size sheet each and find out about its history.

ART & CRAFT

- ❖ Make one Pen/Pencil stand from waste material.
- ❖ Make any paper cutout 3D Scenery.

😊😊😊 THE END 😊😊😊