



**ADARSH VIDYA NIKETAN**

**SENIOR SECONDARY SCHOOL**

**HOLIDAY HOMEWORK OF CLASS-III (2022-23)**

# MY HOMEWORK Folder



name \_\_\_\_\_



**Dear Students,**

*It's holiday time once again! Time for fun and learning!*

**Here are few important points which will make your summer break a really fruitful one-**

- ✓ Books are your best friends, so make sure you read a lot of books and enhance your knowledge and vocabulary.
- ✓ Try to acquire a new skill, learn a new song, play an instrument, improve your handwriting or something of your interest to unravel the artist in you.
- ✓ Contribute to save our precious environment. Minimize the wastage of resources like electricity, water etc.
- ✓ Do tasks that you can easily accomplish like filling water bottles, folding clothes, watering the plants etc.
- ✓ Plan some e-visits and virtual field trips and explore some online resources like Creative Bug and Brain Fitness.

The holiday homework has been very carefully designed to help you recapitulate the concepts done in class and stay connected with your lessons.

**Please note the below instructions-**

- ☞ The worksheets must be done in a very neat and presentable manner in subject fair notebooks.
- ☞ No need to write the questions. Only answers are sufficient.
- ☞ Print out of holiday homework is not required.
- ☞ Revise the syllabus and concepts covered in class till now

*Wishing you a happy and fun-filled vacation! Stay Home, Stay Safe!*



## ENGLISH

**Instructions:- All the work is to be done in grammar notebook.**

**Work should be done in neat and clean handwriting.**

### **WORKSHEET-1 (READING AND GRAMMAR)**

**A. Read the following passage carefully and answer the given questions.**

A frog is an animal that lives both on land and in water, so it's also called an amphibian. When there is more cooling in the atmosphere, it goes inside the ground for about 2 feet. There is a difference between the front and back legs of the frog. Actually, it has four legs and its hind legs are bigger than the front legs. The temperature of the frog varies according to the temperature of the environment. They are mostly seen during the rainy season. So far, more than five thousand species of frogs have been discovered.

Questions:-

1. Where do frogs live?
2. How many species of frogs are there?
3. Which legs of the frog are bigger?
4. Are frogs aquatic or amphibians?
5. Frame a sentence from the word 'environment'.

**B. Re-arrange the following words to make a meaningful sentence.**

1. Book whose this is?
2. There anyone help is me to?
3. Late why you are?
4. Know you do the answer?
5. Do I not his know name.
6. Shining is chirping sun the are and birds the.
7. Mother cook my great is a.
8. Does not who her know?



## **WORKSHEET-2 GRAMMAR (NOUNS AND VERBS)**

**A. Find the nouns and circle the persons in red, the places in blue and the things in black.**

1. The actor won an award for his movie about Chicago.
2. The dog went swimming in the ocean.
3. Ice cream and cookies are the best dessert.
4. The pine trees in the forest are taller than most houses.

**B. Complete the chart by filling in each missing proper noun.**

Common Noun

Newspaper –

City-

Pet-

Holiday-

**C. Underline the verb in each sentence.**

1. We live in an apartment on the boulevard.
2. Some children learn very fast.
3. We go for swimming lessons on Sunday.
4. I like my new bike.

**D. Complete the following sentences by writing 'is', 'am' or 'are' in the blanks.**

1. The weather \_\_\_\_\_ pleasant today.
2. All the children \_\_\_\_\_ on the playground.
3. Boys! You \_\_\_\_\_ always late for class.
4. I \_\_\_\_\_ in the basketball team, too.



## WORKSHEET-3 (CREATIVE WRITING)

Imagine that you suddenly have the ability to talk to animals. Which animal would like to chat with first? What would you say to it? What do you think it would say to you? Seems interesting, isn't it? Imagine yourself talking with animal and put on your imagination and write a paragraph you can draw a related picture also.

हिन्दी

### कार्यपत्रिका - 1

नाम .....

कक्षा .....

तिथि .....

#### 1. खाली स्थान भरो—

- क. भारत में सबसे ज्यादा बोली जानेवाली भाषा ..... है। (गुजराती, हिंदी)  
 ख. हिंदी की लिपि ..... है। (देवनागरी, गुरुमुखी)  
 ग. वर्णों के निश्चित क्रम को ..... कहते हैं। (स्वरमाला, वर्णमाला)

#### 2. सही कथन के आगे ✓ व गलत कथन के आगे ✗ लगाओ—

- क. गाना लिखित भाषा का रूप है।  
 ख. अंग्रेजी को रोमन लिपि में लिखा जाता है।  
 ग. भाषा के नियमों को व्याकरण कहते हैं।  
 घ. सभी भाषाओं की अपनी-अपनी लिपि होती है।

#### 3. उदाहरण देखकर निम्नलिखित संयुक्ताक्षरों का प्रयोग करते हुए दो-दो शब्द लिखो—


- क. त्र — पत्र .....  
 ख. क्ष — रक्षा .....  
 ग. त्त — गत्ता .....  
 ङ. च्व — कच्चा .....

#### 4. नीचे बने चित्रों को देखो। जो हम भाषा की मदद से करते हैं, उनपर ✓ का निशान लगाओ और जिनके लिए भाषा की आवश्यकता नहीं है, उनपर ✗ का निशान लगाओ—





5. चित्र देखकर सही मात्रा लगाओ—



रंमल



कयल



पड़



भल

6. अनुस्वार (ँ) या अनुनासिक (ँ) लगाकर शब्द पूरे करो—



हस



दात



कघा

7. अर्थपूर्ण शब्द बनाओ—

- क. री, क, ब — .....
- ख. र, सू, ज — .....
- ग. गु, ब, ला — .....
- घ. छ, म, ली — .....

8. नीचे दिए गए शब्दों को सही क्रम में लिखकर वाक्य बनाओ—

- क. मेरा है अक्षय कुमार नाम — .....
- ख. तीसरी पढ़ता कक्षा में हूँ मैं — .....
- ग. जॉन मित्र मेरा है सबसे अच्छा — .....
- घ. हिंदी पढ़ना मुझे है पसंद — .....

## कार्य पत्रिका 2

- 1) किसी जंगल में एक लोमड़ी रहती थी। एक दिन वह भोजन की तलाश में इधर-उधर भटक रही थी। उसे अंगूर की एक बेल दिखाई दी। वह बेल काफ़ी ऊँचाई पर थी। बेल पर अंगूर के गुच्छे लटक रहे थे। उन्हें देखकर लोमड़ी के मुँह में पानी आ गया। वह अंगूरों को खाने के लिए उछली, लेकिन उन तक पहुँच न पाई। लोमड़ी ने कई बार कोशिश की, पर उसकी कोशिश सफल न हुई। आखिर वह निराश होकर घर की तरफ़ चल दी और बोली अंगूर खट्टे हैं।

1. लोमड़ी किसकी तलाश में भटक रही थी?

शिकार की तलाश में ☐ सोने की तलाश में ☐ भोजन की तलाश में ☐

2. बेल पर क्या लगे थे?

सेब ☐ अंगूर ☐ आम ☐

3. 'मुँह में पानी आना' का क्या अर्थ है?


मुँह में पानी चले जाना ☐ जी ललचाना ☐ मुँह पानी से भर जाना ☐

4. उपर्युक्त गद्यांश का उचित शीर्षक है—




खट्टे आम ☐ खट्टी इमली ☐ खट्टे अंगूर ☐

2)

2. नीचे चित्र तथा कहानी का संकेत दिया गया है। इसके आधार पर कहानी लिखकर उससे मिलने वाली शिक्षा भी लिखिए—  
 संकेत—



- (क) एक हाथी और दरजी में मित्रता थी।  
 (ख) हाथी नदी से पानी पीकर रोज़ दरजी की दुकान पर जाता।  
 (ग) दरजी उसे रोज़ एक केला देता था।  
 (घ) एक दिन दुकान पर दरजी का बेटा बैठा था।  
 (ङ) उसने हाथी की सूँड़ में सूई चुभा दी।  
 (च) हाथी ने अपनी सूँड़ में गंदा पानी भर कर दुकान में डाल दिया।







3)

- चित्र को देखकर चार वाक्य लिखिए।

1. ....
2. ....
3. ....
4. ....



## MATHEMATICS

### WORKSHEET – 1

#### Topic- Numbers to 10,000

1. Write the successor of the greatest 3-digit number.
2. Write the predecessor of the smallest 4-digit number.
3. Circle the smallest number and underline the greatest number in each row.
 

(a) 3450	3504	3405	3054
(b) 4893	4983	3849	4693
(c) 8650	8605	8655	8566
(d) 2050	2500	2005	2550
4. Write the place values of encircled digits.
 

(a) 3 ⑥ 7 0 _____	(b) 7 5 ⑨ 2 _____
(c) 5 ⑨ 3 2 _____	(d) 6 ③ 8 6 _____
5. Which number is not common between natural numbers and whole numbers?
6. Starting from 2578, what will be the 7th number in ascending order?
7. Starting from 3595, what will be the 8th number in descending order?
8. Write the greatest number and the smallest number using the digits 1, 0, 6 and 2.
9. Round the following:
 

(a) 87 to the nearest ten	(b) 112 to the nearest hundred
(c) 3726 to the nearest thousand	
10. Fill in the blanks.
 

(a) Even numbers have these digits in ones place:  
\_\_\_\_\_ or \_\_\_\_\_ or \_\_\_\_\_ or \_\_\_\_\_ or \_\_\_\_\_

(b) Odd numbers have these digits in ones place:  
\_\_\_\_\_ or \_\_\_\_\_ or \_\_\_\_\_ or \_\_\_\_\_ or \_\_\_\_\_





## 1. Fill in the blanks.

- (a)  $269 + (780 + 689) = (269 + 780) + \underline{\hspace{2cm}}$
- (b)  $(7260 + 1653) + 750 = \underline{\hspace{2cm}} + (750 + 1653)$
- (c)  $2359 + 1 = \underline{\hspace{2cm}}$
- (d)  $4670 + 1000 = \underline{\hspace{2cm}}$
- (e) Hundred more than 6250 is  $\underline{\hspace{2cm}}$
- (f) Thousand more than 5243 is  $\underline{\hspace{2cm}}$
- (g)  $4990 + 1010 = \underline{\hspace{2cm}}$
- (h) 200 more than 1800 =  $\underline{\hspace{2cm}}$
- (i)  $1000 + 0 + 7500 = \underline{\hspace{2cm}}$
- (j) 1 more than 8999 =  $\underline{\hspace{2cm}}$

## 2. Find the sum of:

- (a) 3080 and 2520                      (b) 4125 and 3340
- (c) 2995 and 3662                      (d) 5005 and 2850

## 3. Find the sum.

- |                                                                    |                                                                    |                                                                    |                                                                    |
|--------------------------------------------------------------------|--------------------------------------------------------------------|--------------------------------------------------------------------|--------------------------------------------------------------------|
| (a) $\begin{array}{r} 5425 \\ 3336 \\ + 517 \\ \hline \end{array}$ | (b) $\begin{array}{r} 3455 \\ 646 \\ + 5432 \\ \hline \end{array}$ | (c) $\begin{array}{r} 6851 \\ 436 \\ + 2543 \\ \hline \end{array}$ | (d) $\begin{array}{r} 5725 \\ 341 \\ + 2233 \\ \hline \end{array}$ |
| <input type="text"/>                                               | <input type="text"/>                                               | <input type="text"/>                                               | <input type="text"/>                                               |

4. In a garden, there are 1300 herbs, 1640 shrubs and 200 trees. What is the total number of plants in the garden?
5. In a city, there are 140 shops of toys, 200 shops of grocery items and 300 shops of fancy dresses. Find out the total number of shops.
6. Estimate the sum to the nearest 100.
- (a)  $159 + 209$       (b)  $642 + 79$       (c)  $789 + 299$       (d)  $301 + 390$




# Mental Maths

## Sheet-1



### 1. Crack the code

Add and use your skills to find the answer to this riddle. First solve each sum and then match each number to the letter.



Which ship never sinks ?

A	B	C	D	E	F	G	H	I	J	K	L	M
110	120	130	140	150	160	170	180	190	200	210	220	230
N	O	P	Q	R	S	T	U	V	W	X	Y	Z
240	250	260	270	280	290	300	310	320	330	340	350	360

140	190	150	100	220	130	200	140	160	180
+ 20	+ 90	+ 40	+ 50	+ 20	+ 10	+ 90	+ 40	+ 30	+ 80
160									

F									
---	--	--	--	--	--	--	--	--	--

### 2. Check out the shopping list. Estimate the total amount to be paid.

Real Price		
Item		₹
Bread	-	18
Milk	-	42
Butter	-	39
Cheese	-	68
Fruit Jam	-	57



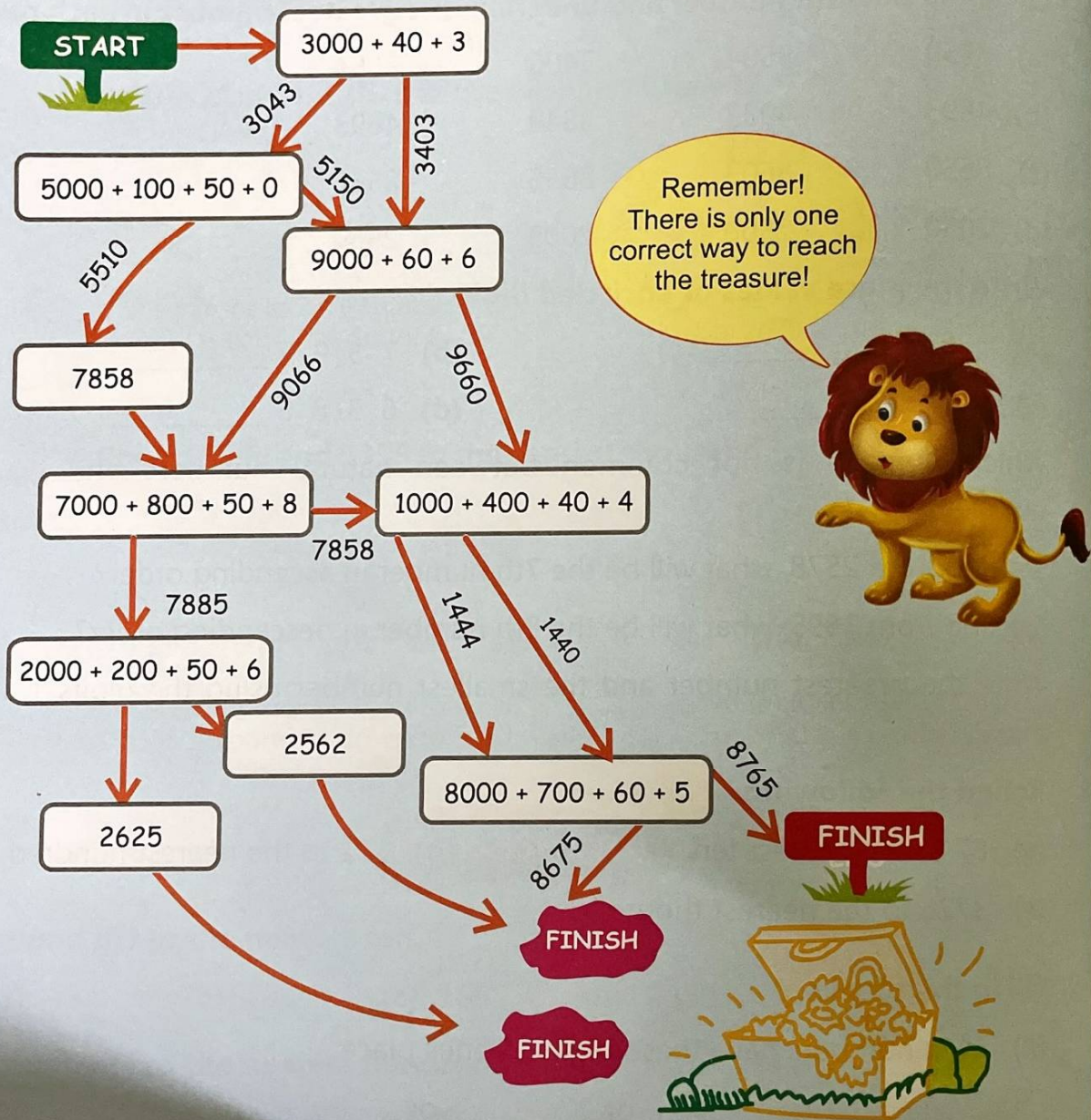
Rounded Price		
Item		₹
Bread	-	_____
Milk	-	_____
Butter	-	_____
Cheese	-	_____
Fruit Jam	-	_____
Total		_____



## Sheet-2



1. Help Chhotu reach the treasure by colouring the boxes with the correct answers.







## Sheet-3

Find out the year of birth of first five Prime Ministers of India from the time of independence. Arrange their year of birth in ascending order.

**Subject Integration**

Find the height of the students in your class. Arrange the height of them in descending order.

**Hands-on-Learning**

Rahul has a game which comprises of flash cards. On each flash card, a number is printed. Now create greatest 4-digit and smallest 4-digit number (no repetition of digits) from the flash cards and write them in words.

**Creativity**

0	1	2	3	4	5	6	7	8	9
---	---	---	---	---	---	---	---	---	---

Greatest 4-digit \_\_\_\_\_

Smallest 4-digit \_\_\_\_\_

Solve the given cross word puzzle.


**Critical Thinking**

**Across:**

- Greatest 3-digit number
- Smallest 4-digit number

**Down:**

- 4 thousands 9 tens 6 ones
- Greatest 2-digit number
- Smallest 3-digit number





**E.V.S.**

## **Topic- Our Body**

### **WORKSHEET 1**

#### **A. MCQ's**

1. Our \_\_\_\_\_ controls the functions of all the organs.  
a. Kidney                      b. Heart                      c. Brain
2. Our nose is the sense organ of \_\_\_\_\_.  
a. Sight                      b. Taste                      c. Smell
3. Kidneys help to remove extra \_\_\_\_\_ and waste as urine.  
a. Fluid                      b. Fruit                      c. Pulp
4. Our internal organs work like a \_\_\_\_\_.  
a. Rock                      b. Machine                      c. Mouse

#### **B. Fill in the blanks**

1. The part between the chest and legs is called \_\_\_\_\_.
2. The \_\_\_\_\_ is central part of our body.
3. \_\_\_\_\_ consists of hair and face.
4. Breaking down of food is called \_\_\_\_\_.

#### **C. Match the following**

##### **Column A**

1. Neck
2. Torso
3. Arms
4. Legs
5. Abdomen

##### **Column B**

- lower limbs  
part between chest and legs  
connects head to trunk  
upper limbs  
central part of our body

#### **D. Define**

1. External body
2. Internal body

#### **E. Question and answer**

1. Write a short note on upper and lower limbs
2. Write the functions of the sense organs of taste and touch.
3. Write the function of liver.
4. Why heart is important organ of our body?



## Hots Question

Raju had digestion problem. He went to the doctor. Doctor advised him to take precautions. Mention the precautions he should take?

## WORKSHEET 2

### Topic- Framework Of Our Body, Taking Care Of Ourselves

#### A. Fill in the blanks

1. Backbone is also called \_\_\_\_\_.
2. Two or more bones connect at a \_\_\_\_\_.
3. Use sharp things only in the presence of an \_\_\_\_\_.
4. We should drink at least \_\_\_\_\_ glasses of water everyday.

#### B. True or false

1. Dirty hands carry germs. ( )
2. The immovable joints help us to move, bend or fold our body parts. ( )

#### C. Write two things you should do to care for each of the following parts of our body.

1. Nails:-

---

---

2. Mouth:-

---

---

#### D. Write any two good habit that we should follow in order to stay fit and healthy.

#### E. Give one word for the following.

1. Muscles under our control. \_\_\_\_\_
2. Joints that allow movement only in one direction. \_\_\_\_\_
3. Joints that are found in the neck. \_\_\_\_\_
4. Walk on the footpath and cross the road only at \_\_\_\_\_

#### F. Hots Question

A patient has gone to the doctor. He advised him to take protein diet. Give the reason why and what he is suffering from?





### G. MCQ's

1. We can keep our body clean by \_\_\_\_\_.  
a. Taking a bath                      b. Eating food                      c. Drinking water
2. Proper sleep makes us feel active and \_\_\_\_\_.  
a. Fresh                                  b. Bored                                  c. Tired
3. \_\_\_\_\_ joints are found in the wrist and ankles.  
a. Hinged joints                      b. Gliding joints                      c. Pivot joints
4. How many bones in an adult human body.  
a. 207                                      b. 100                                      c. 206

### PROJECT WORK

Make 3D model of Lungs.

Or

Paste the picture of skeleton and label it on A4 size sheet. (Use any decorative material to make model beautiful)

## COMPUTER

### TOPIC – KNOW ABOUT COMPUTER, HARDWARE AND SOFTWARE WORKSHEET - 1

#### A. MCQ's

1. A computer can store a large amount of \_\_\_\_\_.  
a. Data                                      b. numbers                                      c. words
2. These are the most powerful computer.  
a. Supercomputer                      b. microcomputer                      c. mainframe computer
3. Which of the following is a microcomputer?  
a. Laptop                                      b. desktop                                      c. both a and b
4. All physical parts of a computer that you can see and touch are called \_\_\_\_\_.  
a. Hardware                                      b. software                                      c. none of them

#### B. Fill in the blanks

1. The device is used for storing data are called \_\_\_\_\_ devices.
2. An \_\_\_\_\_ manages the overall work of a computer.
3. \_\_\_\_\_ can support 4 to 200 users, simultaneously.



### C. True or false:

1. A computer cannot do many tasks at the same time. ( )
2. A monitor is an input device. ( )

### D. One word answer

1. It is used to listen to music. \_\_\_\_\_
2. It reads text from paper and store them on a computer. \_\_\_\_\_

### E. Question and answer

1. What is an operating system?
2. What is application software? Give one example.
3. Write two advantages of a computer?
4. What is mainframe computer?

## WORKSHEET – 2

### TOPIC – KNOW ABOUT COMPUTER, HARDWARE AND SOFTWARE

***Make a colourful collage on types of computers and put in background of computer desktop.***

## **GENERAL KNOWLEDGE**

### PROJECT WORK

- Reading newspaper is a good habit that can provide a great sense of educational value. Many people have habits of reading daily newspapers that their days seem incomplete without taking hold of early morning newspapers. These are some of the benefits that you can get by reading daily newspapers.

You have must have seen your father or grandfather doing the same.

We also want our young AVNites must develop good reading habit.

**Read the newspaper daily and write the 5 main headlines daily of June month in a scrap book.**

- On a chart paper draw/paste 15 animals and their young ones also name them.

## **ART & CRAFT**

❖ ***Make a scenery using different shapes.***

😊😊😊 THE END 😊😊😊