



ADARSH VIDYA NIKETAN

SENIOR SECONDARY SCHOOL

HOLIDAY HOMEWORK CLASS III

Website:

www.avnschoolfaridabad.com

Name of Student:





Dear Students,

It's holiday time once again! Time for fun and learning!

Here are few important points which will make your summer break a really fruitful one-

- ✓ Books are your best friends, so make sure you read a lot of books and enhance your knowledge and vocabulary.
- ✓ Try to acquire a new skill, learn a new song, play an instrument, improve your handwriting or something of your interest to unravel the artist in you.
- ✓ Contribute to save our precious environment. Minimize the wastage of resources like electricity, water etc.
- ✓ Do tasks that you can easily accomplish like filling water bottles, folding clothes, watering the plants etc.
- ✓ Plan some e-visits and virtual field trips and explore some online resources like Creative Bug and Brain Fitness.

The holiday homework has been very carefully designed to help you recapitulate the concepts done in class and stay connected with your lessons.

Please note the below instructions-

- ☞ The worksheets must be done in a very neat and presentable manner in subject fair notebooks.
- ☞ No need to write the questions. Only answers are sufficient.
- ☞ Print out of holiday homework is not required.
- ☞ Revise the syllabus and concepts covered in class till now

Wishing you a happy and fun-filled vacation! Stay Home, Stay Safe!



ENGLISH

WORKSHEET - 1

TOPIC - NOUN (COMMON AND PROPER NOUN)

A. Read the following passage and underline the nouns

Alaina was feeling tired after playing with her brother in the garden. She wanted to read her book now. It was full of colourful illustrations. She asked him to sit on the bench so that she can read the story aloud to him. Her brother wasn't very excited about the idea and asked her to go back home.

B. List out any five common noun and proper noun you see around yourself.

- 1._____. 2._____. 3._____
4._____. 5._____.

C. Find common and proper noun from the sentence and write them in the correct columns.

1. Taj Mahal is a magnificent building.
2. The white House on St. Church Road belongs to my aunt.
3. We saw white tigers and giraffes in the Bengaluru Zoo.
4. His father came to meet Ms. Sudha, the English teacher.
5. The Andamans are a group of islands in the Indian Ocean.

Common Nouns.

Proper Nouns

D. Write two proper noun from the given common noun.

1. monument- _____ , _____
2. dog - _____ , _____
3. teacher- _____ , _____



WORKSHEET-2

TOPIC- UNSEEN PASSAGE, NOUN (NUMBER AND GENDER)

A. Read the story and answer the following questions.

Riya has a new bicycle. It bright pink and shiny. It was a gift for her uncle. He hid it behind a bush to surprise her. When Ria looked behind the bush and saw the bicycle, she jumped with joy. She gave her uncle a big hug. She loves her new bicycle and she loves her uncle.

A. Answer the following questions.

1. What is the colour of the bicycle?

Black

Silver

Pink

2. Who was it a gift from?

Father

Uncle

Mother

3. Where was it hidden?

4. What did Ria do, when she saw the bicycle?

5. Make sentences from the following word.

i). bicycle - _____

ii). uncle - _____

B. Rewrite each sentence, changing the gender of nouns. Make the necessary changes.

1. The actress was wearing a beautiful dress.

2. This boy is my nephew.

3. The woman helped her son.

4. My uncle lives in Delhi with his son.



5. The tall man has gone to see his sister.

C. Spot the mistakes in the given sentences and rewrite them correctly.

1. All the buiscuites were eaten by the guests.

2. The childrens in my class are very naughty.

3. There are many heros acting in the film.

4. Tinku sails paper boates when it rains.

5. Monkies are mischievous animals.

WORKSHEET-3

* Collect pictures from newspapers which depict the services provided by Corona warriors during pandemic. Paste them in an A4 sheet in the form of a collage. At the backside, write down 5-6 lines about how you were inspired by them.



हिन्दी

कार्यपत्रिका -1

(भाषा, वर्ण)

1. सही उत्तर के सामने सही (✓) का चिह्न लगाइए-

क. भाषा कहते हैं-

(i) अखबार में छपी खबरों को

☐

(ii) टी.वी. पर चलती खबरों को

☐

(iii) इशारों में अपनी बात समझाने को

☐

(iv) अपनी बात दूसरों को बताने और दूसरों की बात समझने के साधन को

☐

ख. भाषा के रूप हैं-

(i) तीन (मौखिक, लिखित व सांकेतिक)

☐

(ii) दो (मौखिक व लिखित)

☐

(iii) बहुत सारे रूप हैं

☐

(iv) इनमें से कोई नहीं

☐

ग. मौखिक भाषा कहते हैं-

(i) लिखकर समझी जाने वाली को

☐

(ii) बोलकर समझी जाने वाली को

☐

(iii) लिखित एवं मौखिक को

☐

(iv) सांकेतिक भाषा को

☐

घ. लिखित भाषा कहते हैं-

(i) लिखकर व पढ़कर समझी जाने वाली भाषा को

☐

(ii) केवल पढ़कर समझी जाने वाली भाषा को

☐

(iii) संगीत की भाषा को

☐

(iv) सांकेतिक भाषा को

☐

2. नीचे दिए चित्रों में विभिन्न वेशभूषाओं में कुछ लोग नज़र आ रहे हैं। क्या आप बता सकते हैं कि ये लोग कौन-सी भाषाएँ बोलते हैं।



3. वर्णों को सही क्रम में लगाकर शब्द बनाओ-

1. ब ला गु

.....

2. सा स मो

.....

3. र न हि

.....

4. ब ता कि

.....

5. र बू ज त

.....

6. गो र श ख

.....



4. चित्र देखकर भाषा का रूप लिखो-



1.



2.



3.



4.

5 नीचे दी गई वर्ग-पहेली में भारत में बोली जाने वाली कुछ भाषाओं के नाम छिपे हैं, उन्हें ढूँढ़कर लिखिए-

1.
2.
3.
4.
5.
6.
7.
8.

उ	पं	जा	बी	मी	त	नी
डि	र	दि	स	ना	मि	ल
या	ह	म	ल	या	ल	म
गु	ज	रा	ती	स	म	णि
का	लि	टी	ने	से	को	पु
जी	ब	न	क	श	मी	री
म	रा	ठी	य	ते	ल	गू



कार्यपत्रिका -2

(संज्ञा, विराम चिन्ह)

1. नीचे दिखाए चित्र को ध्यान से देखिए एवं उनमें से संज्ञा शब्दों को छाँटकर लिखिए :-



.....

.....

.....

2. नीचे दिए गए वाक्यों में संज्ञा शब्दों को रेखांकित कीजिए -

- (क) पिता जी बाज़ार जा रहे हैं।
- (ख) हरियाली देखकर मन प्रसन्न हो जाता है।
- (ग) तितलियाँ फूलों पर मँडरा रही हैं।
- (घ) बच्चा पुस्तक पढ़ता है।



3. संज्ञा शब्द भरकर रिक्त स्थान की पूर्ति करें -

- (क) जवाहरलाल नेहरू के प्रथम प्रधानमंत्री थे।
- (ख) कुतुबमीनार में है।
- (ग) फूलों की से बाग महक रहा है।





4. निर्देशानुसार लिखिए -

(क) अपने किन्हीं चार मित्रों के नाम लिखिए।

.....

.....

(ख) किन्हीं चार देशों के नाम लिखिए।

.....

.....

5. सही विराम - चिह्नन वाले वाक्यों के सामने (✓) तथा गलत विराम - चिह्नन वाले वाक्यों के सामने (✗) के चिह्नन लगाइए-

(क) आपका घर कहाँ है।

(ख) क्या आज बारिश होगी?

(ग) मैं मयंक आनंदी और प्रगति के साथ मंदिर जा रही हूँ।

(घ) वाह! तुम तो बहुत सुंदर चित्र बना रही हो।

☐

☐

☐

☐

6. रेखा खींचकर निम्नलिखित विरामों का उनके चिह्नों से सही मिलान कीजिए :-

विराम	चिह्न
अल्पविराम	?
प्रश्नवाचक चिह्न	,
पूर्णविराम	-
योजक चिह्न	



कार्यपत्रिका -3

1. चित्र देखकर उचित विराम चिह्नों का प्रयोग करते हुए वाक्य लिखो :- (दस वाक्य लिखें)



.....

.....

.....

.....

.....

2. दिए गए चित्रों की सहायता से अपने शब्दों में कहानी लिखिए -



3. नीचे दिए गए विषय पर 80 -100 शब्दों में अनुच्छेद लिखिए
मेरा परिवार :-



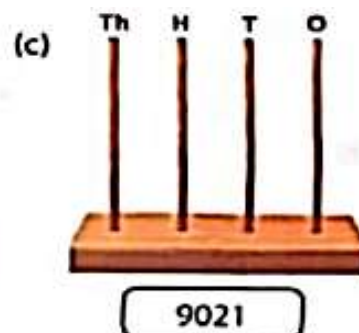
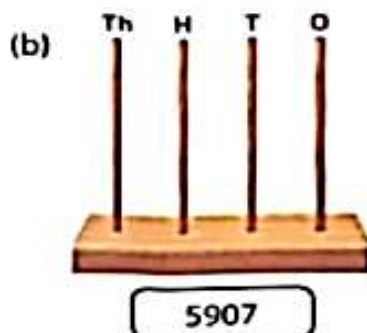
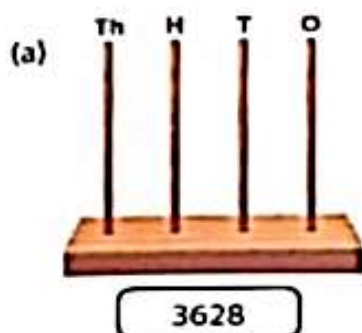


MATHEMATICS

WORKSHEET - 1

TOPIC - NUMBERS

1. Draw beads to represent the numbers given in the boxes:



2. Fill in the boxes.

(a) $7982 = \square \text{ Th} + \square \text{ H} + \square \text{ T} + \square \text{ O}$

(b) $2805 = \square \text{ Th} + \square \text{ H} + \square \text{ T} + \square \text{ O}$

(c) $\square = 6 \text{ Th} + 0 \text{ H} + 1 \text{ T} + 9 \text{ O}$

(d) $\square = 8 \text{ Th} + 9 \text{ H} + 2 \text{ T} + 7 \text{ O}$

3. Write in expanded form.

(a) $4208 = \square + \square + \square + \square$

(b) $8976 = \square + \square + \square + \square$

(c) $1635 = \square + \square + \square + \square$

4. Write the place value of the circled digit in the given numbers.

(a) $\textcircled{4} 3 2 7$ _____ (b) $8 5 \textcircled{0} 1$ _____

5. Arrange 5624, 5426, 4571, 6245, 6345, 6340 in ascending order.

--	--	--	--	--	--

6. Arrange 1843, 1934, 1624, 1857, 1846, 1924 in descending order.

--	--	--	--	--	--

7. Form the greatest and the smallest numbers with the given digits, using each digit only once:-

Greatest Smallest

Greatest Smallest

(a) $9, 7, 8, 1$ _____, _____ (b) $7, 3, 4, 6$ _____, _____



WORKSHEET - 2

TOPIC – ROMAN NUMERALS

1. Tick (✓) the correct answer :

(a) Roman numeral for 50 is

(i) L ☐ (ii) X ☐ (iii) C ☐

(b) XXII represents

(i) 22 ☐ (ii) 32 ☐ (iii) 52 ☐

(c) 39 is written as

(i) XXXVIII ☐ (ii) XXXIX ☐ (iii) XXXXI ☐

2. Compare and use > , < or = in each of the following :

(a) VI IV

(b) XXII XII

(c) XXX XXXI

(d) XXXIX XXXVIII


3. What comes before, after and between in the following:-

(a) III V

(b) X

(c) XIII

(d) IX XI





WORKSHEET - 3

TOPIC – ADDITION

1. Tick (✓) the correct option:-

- (a) The answer obtained in addition is called
(i) sum ☐ (ii) difference ☐ (iii) product ☐ (iv) none ☐
- (b) Each of the numbers we add is called
(i) sum ☐ (ii) addition ☐ (iii) addend ☐ (iv) zero ☐
- (c) 5 parrots are sitting on a tree. 3 more parrots join them. How many are there?
(i) 8 ☐ (ii) 7 ☐ (iii) 2 ☐ (iv) 9 ☐
- (d) If 0 is added to 5 we get
(i) 50 ☐ (ii) 0 ☐ (iii) 5 ☐ (iv) none ☐
- (e) Two red pens and three black pens equal to how many pens?
(i) 5 ☐ (ii) 1 ☐ (iii) 6 ☐ (iv) 4 ☐

2. Arrange in columns and add:-

- (a) $6230 + 356 + 13$
(b) $2401 + 1036 + 101 + 60$
(c) $3261 + 428 + 10$

3. Add:-

a.	Th	H	T	O
	3	2	4	6
+	2	3	3	2

b.	Th	H	T	O
	4	9	2	6
+	5	0	6	3

WORD PROBLEMS ON ADDITION :-

1. A school has 6084 chairs and 2159 tables in all. How many chairs and tables it has in all?
2. A biscuit factory made 2816 biscuits in the first hour of the day and 3083 biscuits in the second hour. How many biscuits were made in these two hours?





WORKSHEET - 4

TOPIC – MENTAL MATHS CORNER

1. Tick (✓) the correct answer :

(a) $5246 + 1000$ equals

(i) 5346

☐

(ii) 6246

☐

(iii) 5256

☐

(b) $5493 + 3954 = \boxed{} + 5493$

(i) 9047

☐

(ii) 3954

☐

(iii) 3950

☐

(c) $\boxed{} + 100 = 8644$

(i) 8544

☐

(ii) 7644

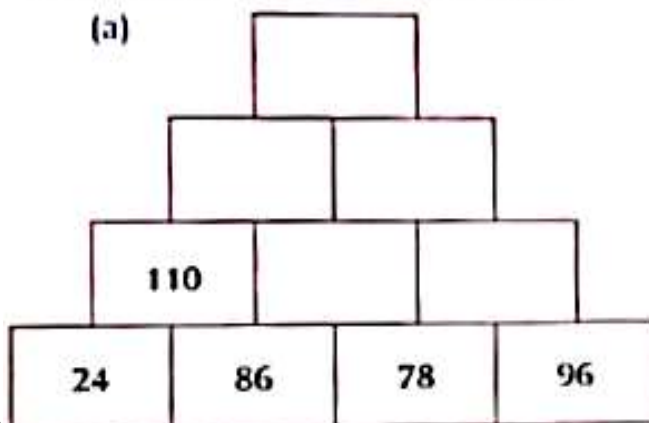
☐

(iii) 8634

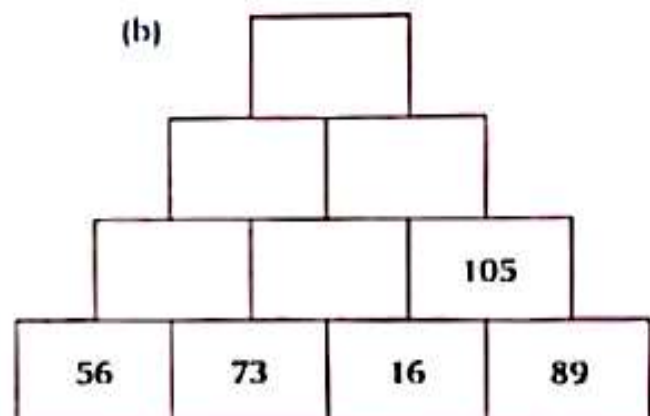
☐

2. Complete the addition towers.

(a)



(b)




3. Fill in the blanks:-

(a) $5246 + 1000 = \boxed{}$

(b) $6275 + 1120 = \boxed{}$

(c) $5245 + 2760 = \boxed{}$

(d) $3636 + 2424 = \boxed{}$



**WORKSHEET - 1****TOPIC – OUR BODY PARTS****A. Fill in the blanks**

1. _____ controls the functions of all organs of our body.
2. There are _____ sense organs.
3. Stomach helps in _____ of food.
4. _____ pumps blood to different parts of our body.

B. Circle the odd one out

1. Ear, Nose, Heart, Skin
2. Kidney, heart, brain, eyes
3. Eyes, nose, mouth, leg

C. Match the following

- | | |
|------------------|---------|
| 1. Feet | Eyes |
| 2. Think | Stomach |
| 3. Breath | Skin |
| 4. Gastric Juice | Brain |
| 5. Cartoon | Nose |

D. Define

1. Internal organ
2. Organ system

E. Question and answer

1. What are four kinds of taste buds present on our tongue?
2. Which organs of your body are used for respiration?
3. Draw a diagram of any 5 Internal organs.



WORKSHEET - 2

TOPIC – TAKING CARE OF OUR BODY, LIVING IN THE FAMILY

A. Fill in the blanks

1. We should wash our hands with _____.
2. We should drink at least _____ glasses of water everyday.
3. The best time to do exercise is _____.
4. Food gives us _____.

B. Write appropriate word for each of the following

1. When I have a shower, I use _____, _____ and _____.
2. When I brush my teeth, I use _____, _____.

C. Write two things that you should do to care for each of the following parts of your body

1. Hair

- i) _____
- ii) _____

2. Skin

- i) _____
- ii) _____

D. Write any one bad habit that we should not follow in order to stay fit and healthy.

E. Write the type of family described in the stories.

Nuclear family

Single-parent family

Step-parent family

Extended family

1. My name is John. I live with my father, Peter. We live together in a house near the park.

I have a _____.

2. My friend Anna lives with her mother, father, sisters, grandfather and her uncles in a yellow house.

Anna lives in an _____.



3. Dennis lives with his step-father, mother, and baby sister beside the red church.

Dennis has a _____.

4. Jace lives with his mother and father. He's an only child.

Jace has a _____.

F. Hots question

1. Ria loves to play in puddles during rain. Is it a good habit? What precautions should she take?

COMPUTER

WORKSHEET - 1

TOPIC – INTRODUCTION TO COMPUTER, WORKING WITH WINDOWS

MCQ's

1. Data and instruction given by the user to a computer is called _____.
a) output b) input c) storage
2. A printer is an _____ device.
a) input b) output c) processing
3. _____ are small pictures that appears on the desktop.
a) gadgets b) wallpaper c) icons
4. _____ is located on the left corner of the taskbar.
a) start button b) close button c) system tray

A. Fill in the blanks

5. _____ is located under the title bar.
6. MS stands for _____.
7. The _____ device of computer is called CPU.

B. True or false

8. A computer has two types of memory. ()
9. A computer performs many functions. ()



C. Write full forms

10. ALU: _____

11. GUI: _____

D. Question and Answer

12. What is wallpaper?

13. Define processing device. Name the CPU parts.

14. What is output? Give 4 examples.

15. What is status bar?

WORKSHEET - 2

TOPIC – INTRODUCTION TO COMPUTER, WORKING WITH WINDOWS

1. Change your desktop wallpaper into the picture of a person who inspires you the most or your role model.
2. Save pictures of any 5 endangered animals in storage device. Like for eg. CD, DVD or Pendrive

GENERAL KNOWLEDGE

- ❖ Hey AVNites! let us educate ourselves about our country- The Incredible India. On an A4 sheet, write down the 29 states along with their capitals. You may create the same on MS Word as well.
- ❖ Choose any state and write down it's state language, dance, traditional dress and cuisine. Look for YouTube videos about the state and explore it's monuments, wildlife etc.

ART & CRAFT

- ❖ Create a beautiful art piece or product using waste material such as old newspapers, CD, buttons, straw etc.
- ❖ Draw your favourite cartoon character, sketch and colour it.

😊😊😊 THE END 😊😊😊